

Number Explorer Missions



**Look for shapes wherever you go.
How many sides can you count?
How many corners can you see?**



**How many shapes with 4
sides can you see?**



**Look for signs with 3
sides when you are out**



**Look for shapes with only
1 side. Can you find any?**




Play Together

Sides and Corners. Pick a number between 3 and 8. Challenge your child to draw a shape using that number of lines. Once they have done so, invite them to choose a number and challenge you to draw.

For your next mission, find the episode 'Pattern Palace'

Flatland

This mission belongs to



**I have 4
sides and
4 corners**



Numbers to 10



2D shapes

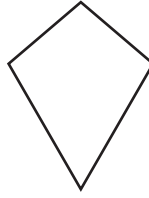
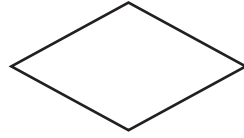


Flatland


Touch and Count!

2

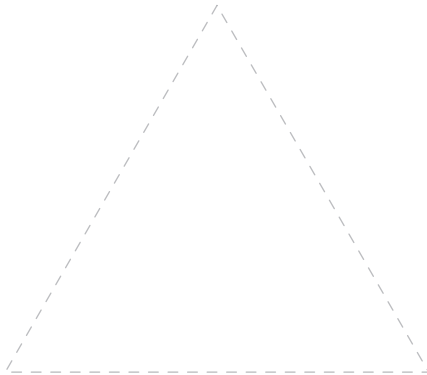
Can you count all the sides on these shapes. How many are there?



Bonus! Can you count all the corners too?




Draw the Lines!



What shape can you make with 3 lines? Draw it on the page!

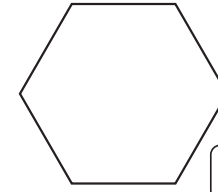
How many sides are there? How many corners can you count?



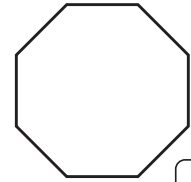

Count and Tick!

3

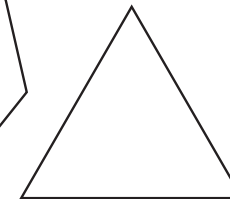
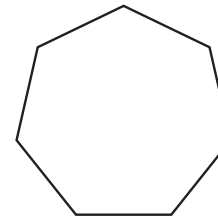
Tick all the shape with 6 sides.



Tick all the shapes with 8 corners.



Which Shape?



Which shape has 7 sides? Point to it.

Which shape has three corners? Say its name.

