

# Number Explorer Missions



**Jump, hop or skip  
11 times**



**Draw a rectangle with 15 blocks.  
Can you draw it another way, too?**



**Find 12 items from around your home that are roughly the same size. Put them all together. Now, see how many different ways you can split the pile into equal sized groups**



**Spot the number 13 when you are out**



## Play Together


Numberling Hunt. Cut out all the Numberblock cards and shuffle them. Ask your little learner to pick one, then challenge them to draw or find that Numberblock's Numberling.

For your next mission, find the episode 'Step Squads'

# Tween Scenes

This mission belongs to \_\_\_\_\_

Who can you see? Can you say their names?



Numbers to 20



Numbers 11-15



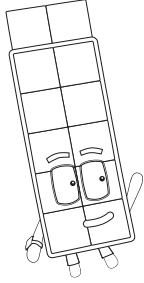
Tween Scenes

## Who is it?


Which Numberblock is one more than 10? Circle them!

2

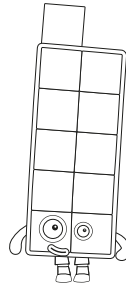
12



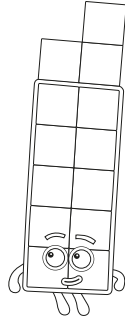
10



11



13



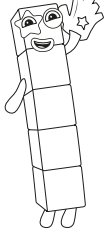
7



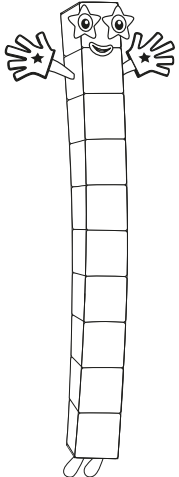
## Match up

Draw lines to match the Numberblocks that can make Fourteen together.

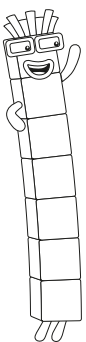
5





10



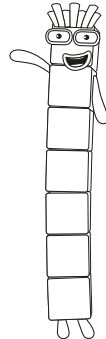
1



9



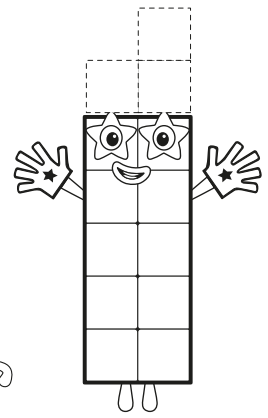
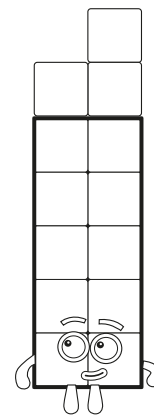
7



## Draw the Blocks


How many more does Ten need to make Thirteen?  
Draw the right number of blocks.

13



## Spot it!

Which Numberblock has the same number of blocks as all of these Numberblocks together?

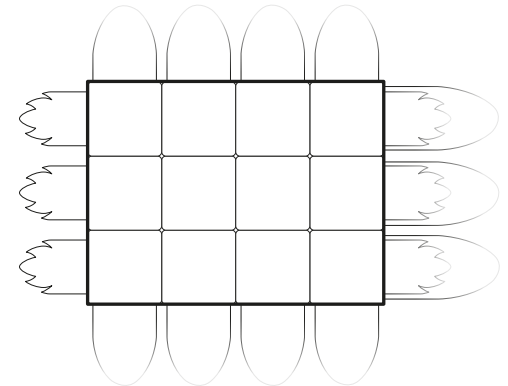


Can you find them hiding on the page?



## Shape fun!

Which Numberblock can make this shape?  
Shout it out!



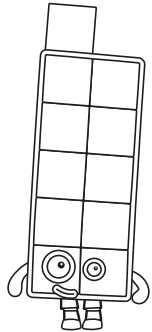
Can you colour them and their rectangle rays?




# Numberling Hunt



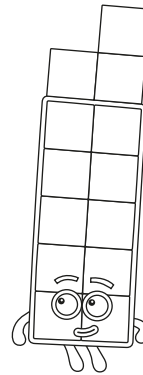
11



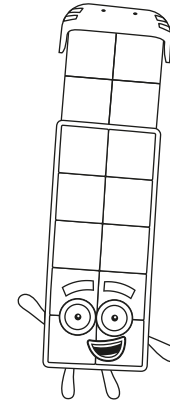
12



13



14



15

