

Number Explorer Missions



Can you make 19 different poses?



Look for crazy shapes when you are out.
How many can you find?



March and count 19 steps



Draw a crazy shape with 19 blocks



Play Together

Crazy Shapes! Find a sheet of gridded paper (if you have it) and coloured crayons or pencils. Take it in turns to colour in squares that are next to each other, stopping when you've coloured 19 in total. What shape have you made? Can you turn it into a crazy picture? If you don't have gridded paper, you can just draw squares.

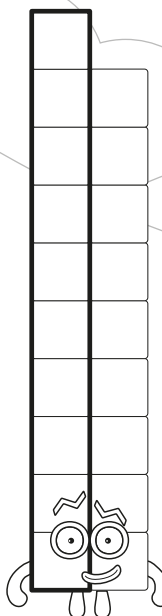
For your next mission, find the episode 'Twenty'

Nineteen

This mission belongs to _____

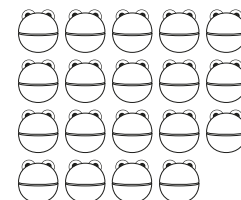
I am Nineteen
and I am a
one-off!

19




Fact File

19 is this many:



Nineteen has 19 blocks:



Nineteen is
19 Ones,
18 and 1,
10 and 9



Numbers to 20



Meet Nineteen

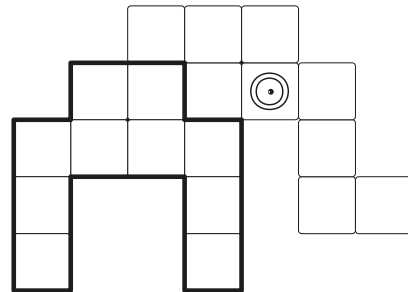
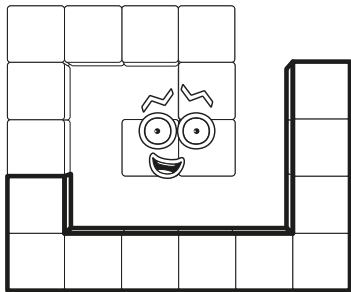


Nineteen

Touch and say!

2



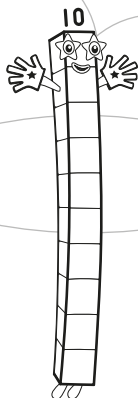


How many blocks are in each of these shapes?



Ten and a Friend!

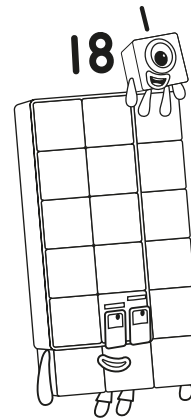
How many more does Ten need to make Nineteen?
Tick the right Numberblock.

$$10 + \square = 19$$



Who is it?

3



Which Numberblock is one more than Eighteen?
Shout out their name!



Sorting Shapes!

Draw lines to match Nineteen to all the shapes they can make.

