

# Number Explorer Missions



**Look for Twenty-Six's Numberling when you are out and about. Can you draw where you found it?**



**Make a pile of 26 things. Can you split them into 2 equal piles? How many do you have in each pile?**



**Can you split twenty hops fairly between your two legs?**



**Ask a grown-up to join you. Can you split twenty hops fairly between all four legs? How many times does each leg hop?**



## Play Together

**Under Cover Numbers Game.** Can you find smaller numbers hiding inside bigger ones? Cut out the Numberblocks on the extra sheet and find 26 small blocks or pieces of pasta. Pop the Numberblocks in a pile face down and take it in turns to pick one up. If you pick up Numberblock 18, pick up 18 blocks/pieces of pasta, and so on. Work with your little learner to split each number into equal groups. 18 can split into two nines, three sixes, six threes and nine twos. How many different ways can you split each number?

For your next mission, find the episode 'The Team Factor'

4

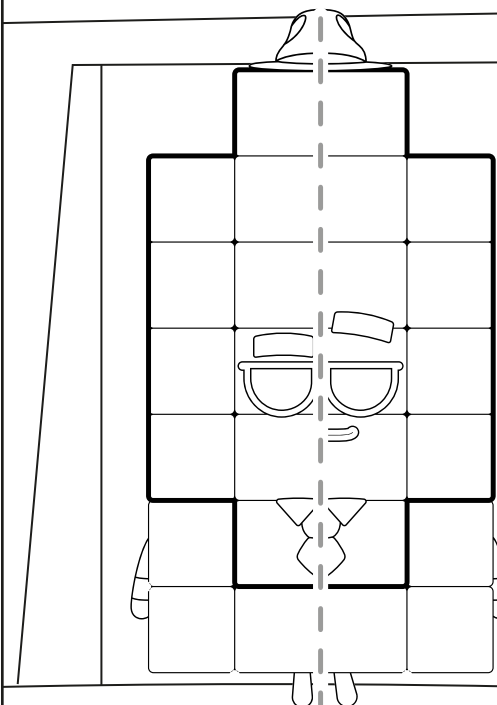


# Hidden Talents

This mission belongs to \_\_\_\_\_

**Time to split! Draw a line to split Numberblock Twenty-Six into two Thirteens.**

26




## Fact File

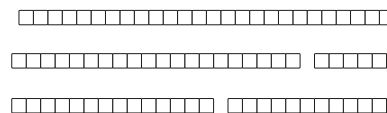
26 is this many:



**Numberblock Twenty-Six has 26 blocks**



**Twenty-Six is...**  
26 Ones, 20 and 6,  
13 and 13,



Numbers to 50



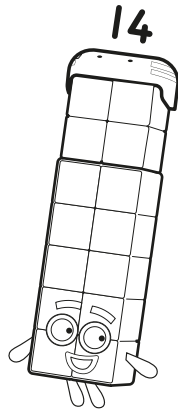
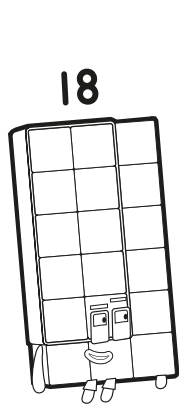


Number 26 / division into equal parts



Hidden Talents

# Who is it?

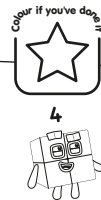



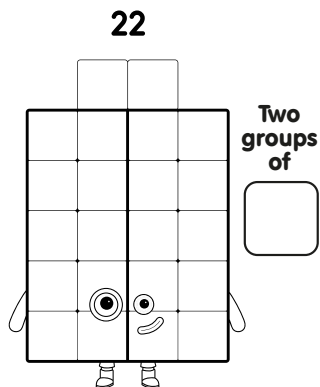


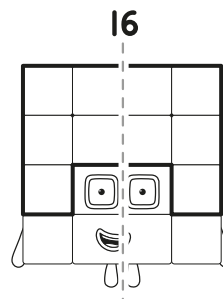
## Which Numberblock can be split into 3 Sevens? Tick them!



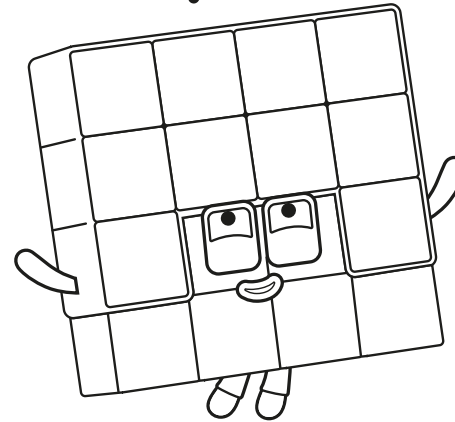
Can you circle the Numberblock that is 2 Sevens?

# Split up

Draw lines to split each Numberblock into two equal groups.



# 16



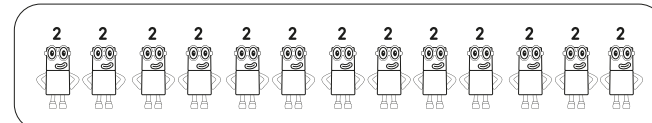
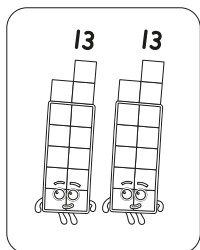


# Spot it

How many Numberblock Fours can Sixteen split into? Can you find them all hiding somewhere on these pages?



# Look inside

Draw lines to show which Numberblocks live inside Twenty-Six.



# Under Cover Numbers

