

Number Explorer Missions



Use the Numberblock Fours you have cut out to try counting in fours. Can you get all the way to Forty? Can you count backwards from Forty to Four?



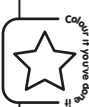
Look for 4 legs on an animal or legs on a chair. Can you find ten groups? How many is that?



Try making a square with 4 pieces of pasta. Can you make 10 squares using 40 pieces of pasta?



Do 10 star jumps as you say your 4 times table. One 4 is 4, two 4's are 8, and so on. Can you get all the way to ten 4's are 40?



Play Together

Fun Times Tables. Find the extra sheet with the Times Tables on it. Can you put the right number of Fours on each Times Table. How many blocks are there each time?

For your next mission, find the episode 'Sky High Fives'

Four on the Floor

This mission belongs to _____

Which Numberblock is the same as Five Fours?
Count the blocks if you get stuck.


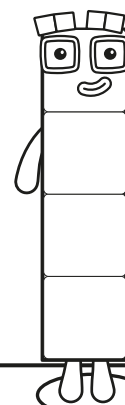
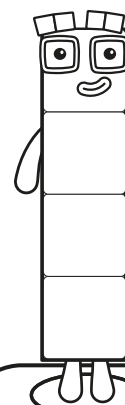
4

4

4

4

4



Numbers to 100




Four Times Table



Four on the Floor


4




Take it in turns
to place the
Fours in each
Magic Mirror.
Can you say the number
sentences as
the Fours are
placed?

Magic Mirrors


How many Fours have you got each time?
How many blocks altogether?




$$1 \times 4 = 4$$




$$2 \times 4 = \underline{\quad}$$




$$3 \times 4 = \underline{\quad}$$



$$4 \times 4 = \underline{\quad}$$



$$5 \times 4 = \underline{\quad}$$

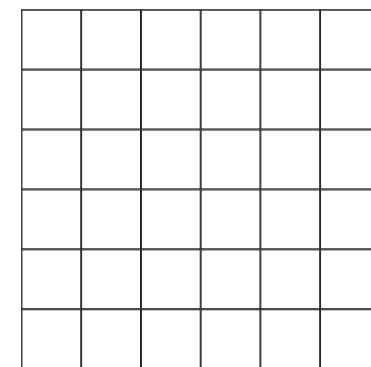


$$6 \times 4 = 24$$



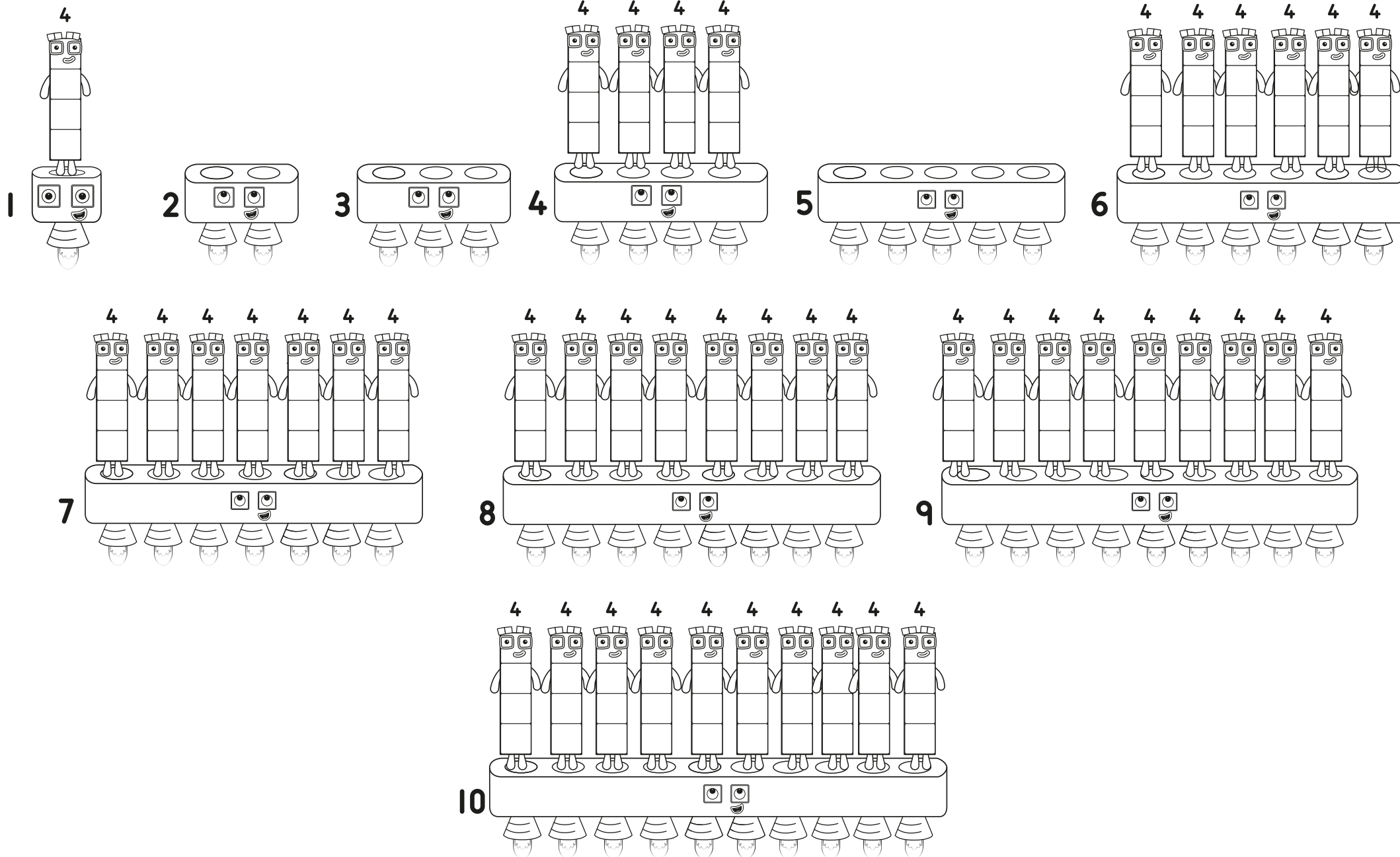
How many
Fours?

How many
Numberblock
Fours can you
draw in this
square?
Do they all
look the same?

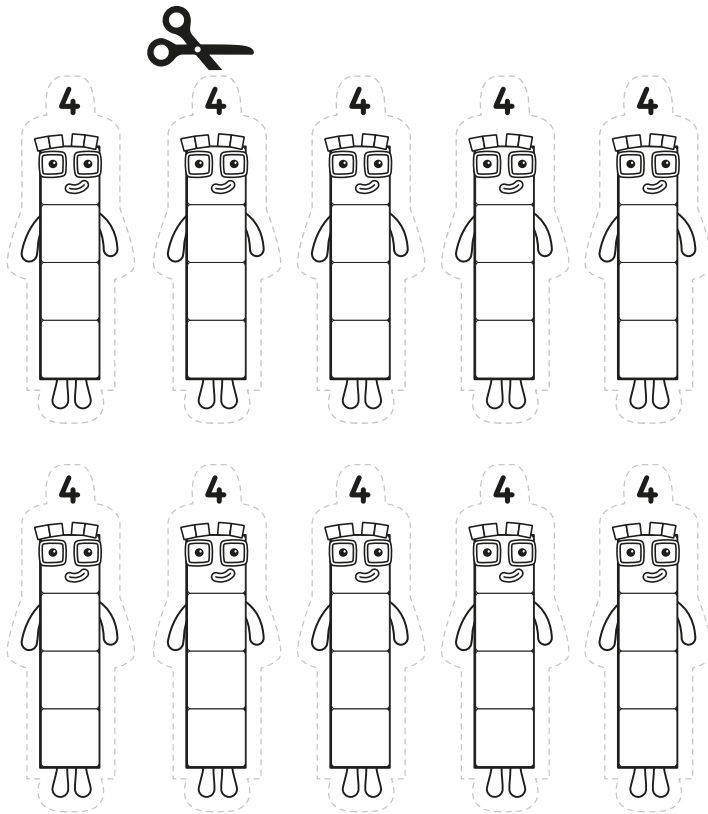


Fun Times Tables

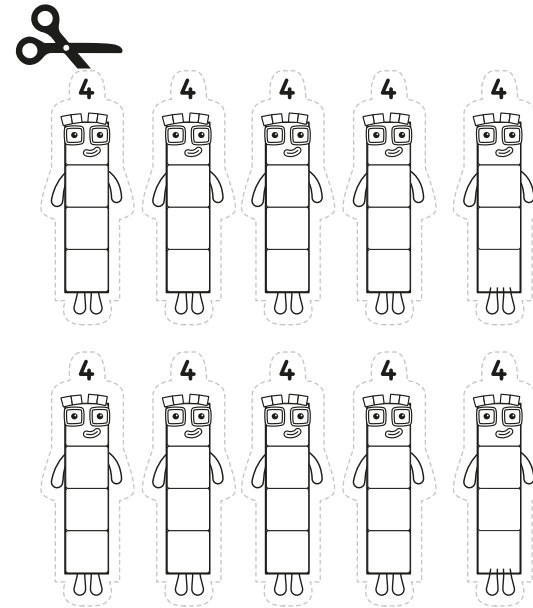
Use your Fours to fill the gaps in the pattern.



Forever Fours



Play Together



Use your Fours to fill the gaps!