

Number Explorer Missions



Jump or hop up and down 12 times



Spot 12 things that are rectangles when you are out and about



Hold up Ten fingers. How many more fingers would you need to make 12?



Spot the number 12 next time you go for a walk



Play Together

Amazing Arrays! Pop the Numberblobs onto Numberblock 12's amazing arrays templates, and have fun seeing how many shapes you can make! Did you know, an array is an orderly arrangement of objects in equal rows or columns.


For your next mission, find the episode 'The Way of the Rectangle'

Twelve

This mission belongs to _____

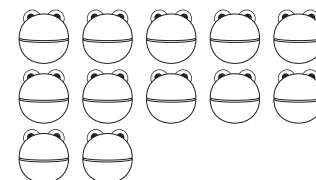
I am Twelve and I am a super rectangle!

12

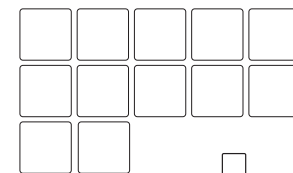


Fact File

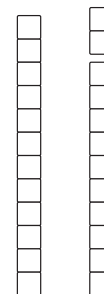
12 is this many:



Twelve has 12 blocks:



Twelve is
12 Ones,
10 and 2,
11 and 1



Level 3



Meet Twelve

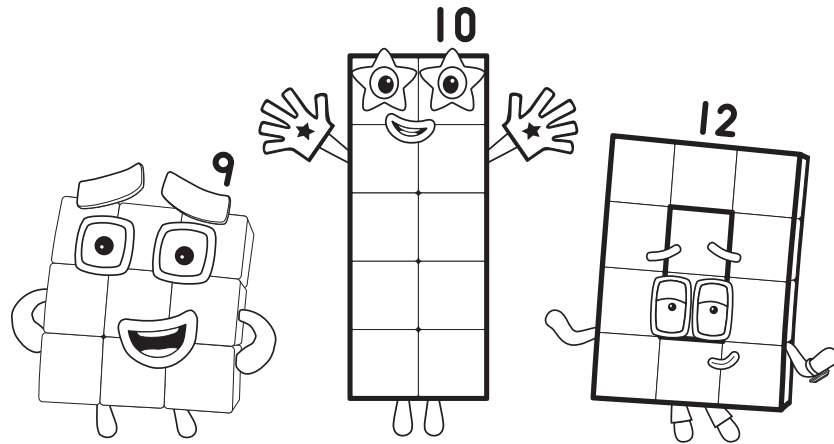


Twelve

Who is it?


2

Which Numberblock is one more than Eleven?





Ten and a friend

How many more does 10 need to make 12?
Draw the right Numberblock!




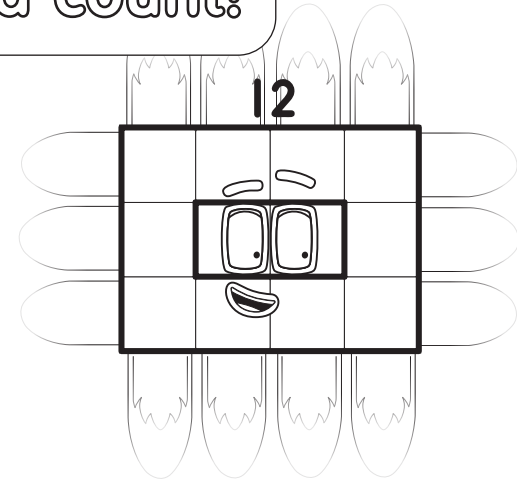
$$10 + ? = 12$$



Touch and count!

3

Can you see the blocks in
Twelve's arrays?
How many blocks tall?
How many blocks wide?



10 5 8 11 12 2

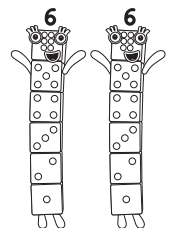

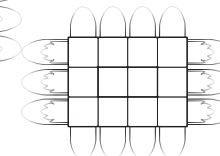

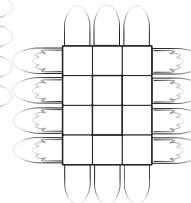
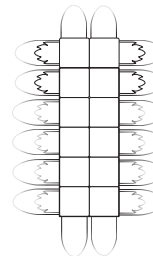
Spot it!

Can you spot Twelve's
numberling? Circle it!



Match up

Draw a line to match
each array to the
right group of
Numberblocks.



Making Twelve!

