

Number Explorer Missions



Look for Sixteen's Numberling when you are out and about.



Find 4 lots of 4 things in the house. Can you arrange them into 4 rows? How about 4 columns? What do you notice about the shape each time?



Clap your hands 16 times, counting as you clap.



Draw Numberblock Sixteen 2 houses. Give each house 8 windows. How many windows can you see altogether?



Play Together

Race to Sixteen. Find a six-sided dice or online dice roller and play this game with your little learner. Take turns to roll the dice. If you roll a 1, 2 or 3, move that number of spaces - say the numbers that you land on as you move. First to get to 16 wins!


For your next mission, find the episode 'Square Club'

Sixteen

This mission belongs to _____

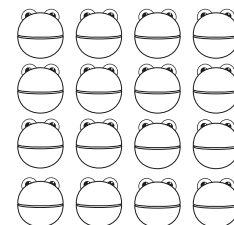
I'm a square and I love a party!

16




Fact File

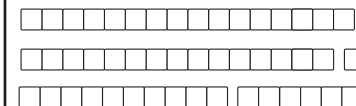
16 is this many:



Sixteen has 16 blocks:



Sixteen is... 16
Ones, Fifteen and
One, Ten and Six



Level 3



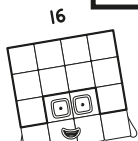

Meet Sixteen



Sixteen

Shape fun!


Do you know any Numberblocks that can make this shape?



Spot it!

Which Numberblock is one less than Sixteen? Can you spot her on these pages?

16

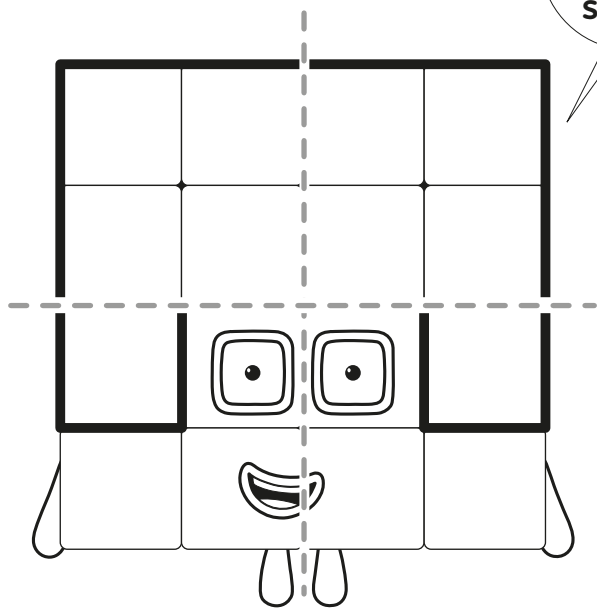


Split it!


Draw lines to split Sixteen into Fours. How many Fours are there?

Is there another way to do it?

16



You know what 4 Fours are... Sixteen!

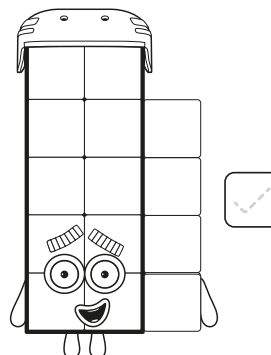




Hush hush!




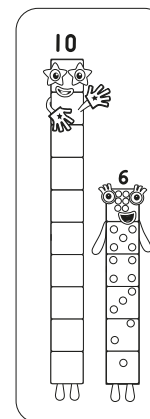
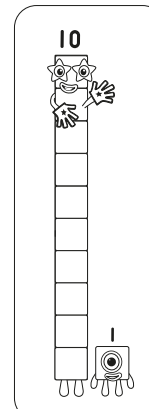
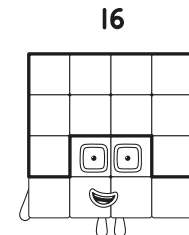
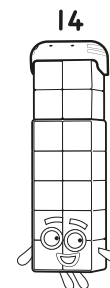
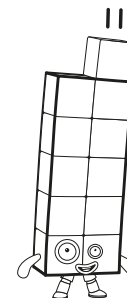
Look and Tick

Who has 16 blocks?
Tick the right Numberblock



Ten and a Friend

Draw lines to match each Numberblock to the Numberblocks that can make them.



Race to Sixteen



START

1

2

3

4

5

Stick



6

7

8

9

10

11

Stick



12

13

14

15

16

FINISH

