

Number Explorer Missions



Show the Numberblocks your special counting skills. Count all the way to 20!



Make two tall towers of 10 soft things.



Look for these Numberlings when you're out exploring: 16, 17, 18, 19, 20.
Which did you spot first?



Play Together

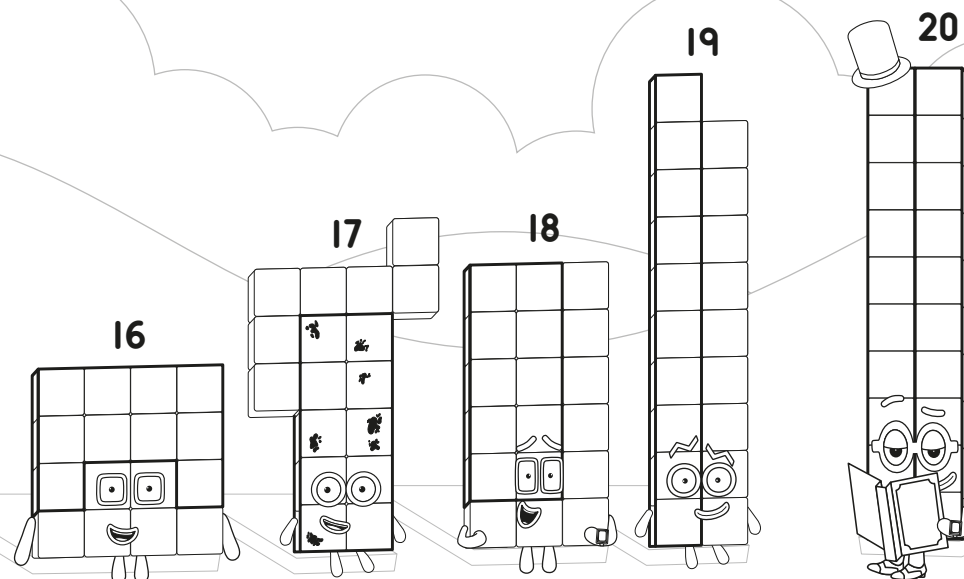
Numberblings Bingo! Take the Numberlings bingo sheet on your next trip out and see if you can tick off all of the Numberlings. Look on shop signs, road names, car registration plates and food packaging and see if you can spot all 20.

For your next mission, find the episode 'Flights of Fancy'

Tall Stories

This mission belongs to _____

Who can you see? Say their names!



Level 3



Numbers 16 – 20

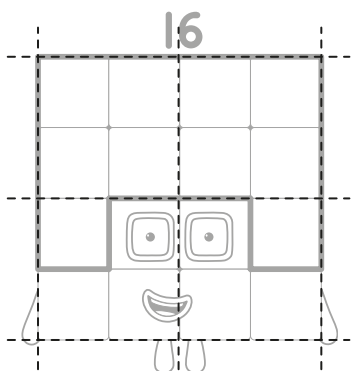


Tall stories

Give it up for.. Sixteen!

2

Can you draw lines to show the four squares inside Sixteen? How many blocks are in each group?




I'm a square made of squares!



Draw Seventeen!

Pretty as a picture



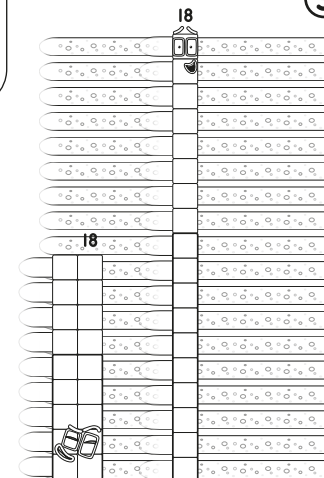
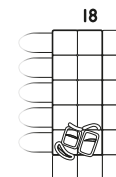
Help Seventeen draw a self portrait. How many blocks to do you need to draw on Sixteen to make Seventeen?



It's Eighteen

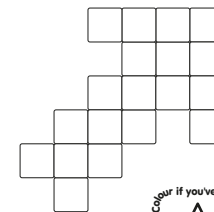



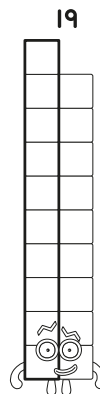
3

Help this Numberblock get ready to zoom! Tick the rectangle array that can ride an 18 ray track.



Match up!

Draw lines to match Nineteen to all the shapes she can make.

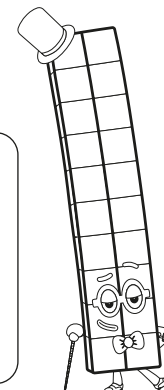


Numberling Jumble

Which numberling belongs to Twenty? Circle it!



8 7 9 6 19
11 20 4
10 18 2 13



Numberlings Bingo!

1	2	3	4	5
6	7	8	9	10
11	12	13	14	15
16	17	18	19	20

