

Number Explorer Missions



Spot 4 pairs of feet. How many feet are there altogether?



Draw 5 cars with 4 passengers in each one. How many passengers are there altogether?



Collect your favourite small toys and make 4 piles of 3 toys. How many toys do you have altogether?



Draw 3 aliens each with 5 crazy eyes! How many eyes are there altogether?



Play Together


Number March! It's time to march along. As you pop down each foot, count up in 2s, 5s or 10s. Are you ready now? 2, 4, 6, 8...

For your next mission, find the episode 'The Lair of Shares'

Fun Times Fair

This mission belongs to _____

**Look who's on the teacup ride!
How many teacups can you see?
How many Numberblobs are in each cup?
How many Numberblobs are there all together?**



Level 3



Multiplication



Fun Times Fair



Complete the pattern!




2

How many cars can you see?

How many Numberblobs are in each car?

Can you complete the pattern?

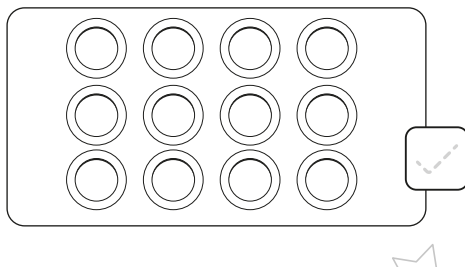
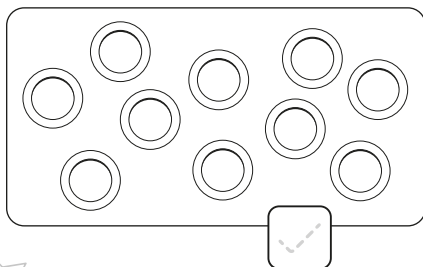
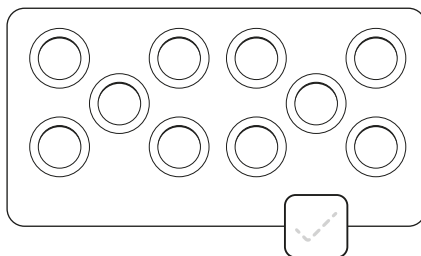
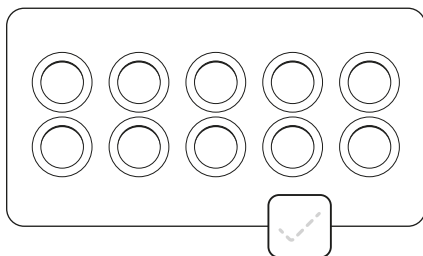
How many Numberblobs are there altogether?



Times and tick!






Tick all the pictures with 10 ride tokens.



4 lots of 4 Numberblobs
are on the ride! How
many is that altogether?




Circle the right
Numberblock.



Draw it!



Draw 2 Numberblobs in each train carriage.
How many Numberblobs are there altogether?
Shout it out!



Who is it?

3

