

# Number Explorer Missions



Look for numbers 21, 22 and 23 when you are out. Try looking on signs, front doors and buses.



Make 3 piles of 7 small things. How many things do you have all together? How many other ways can you find to make 21?



Walk 20 steps, then walk 1 more. How many steps have you walked altogether?



Keep adding one more step. Can you get to Twenty-Three?



## Play Together

Twenty and Some More! Cut out Numberblocks One, Two, Three and Twenty. Use your cut outs to have fun adding One more to Numberblock Twenty to make 21. Then take One away. Next, add Two to make 22, then take Two away. Keep going and add Three to make 23, then take Three away.

For your next mission, find the episode 'We're Going on a Square Hunt'

# Twenty-One and On

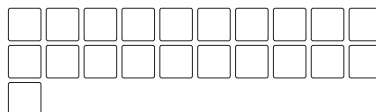
This mission belongs to \_\_\_\_\_

## Fact File

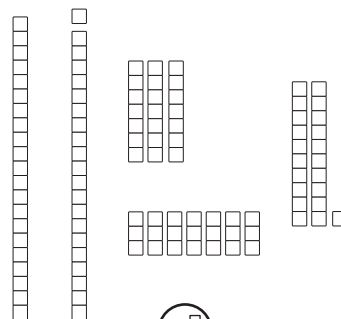
21 is this many:



Twenty-one has 21 blocks:




Twenty-One is ... 21 ones, Twenty and One, 3 Sevens, 7 Threes, 2 Tens and a One



I am Twenty-One, and I am a Number Explorer!

21



Level 4



Numbers 21, 22 and 23



Twenty-One and On

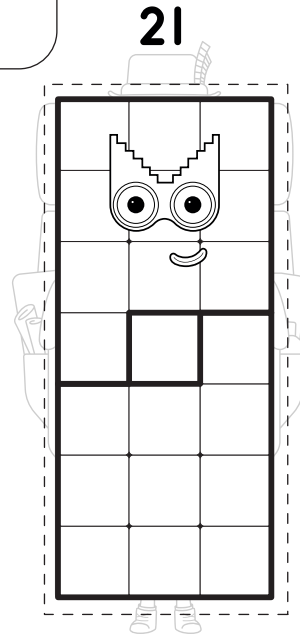

## Who is it?

2

Which Numberblock is  
1 more than Twenty?  
Trace around them.

What's the  
difference?

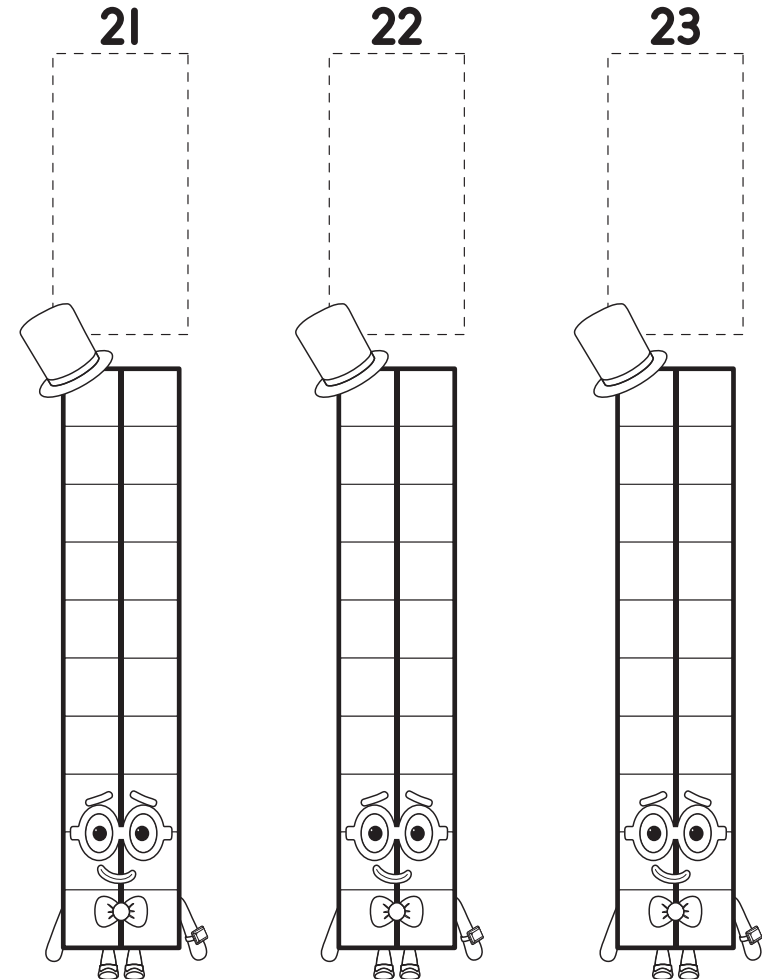
What is the difference between  
Twenty-One and Twenty-Two?  
Count the blocks to find out.



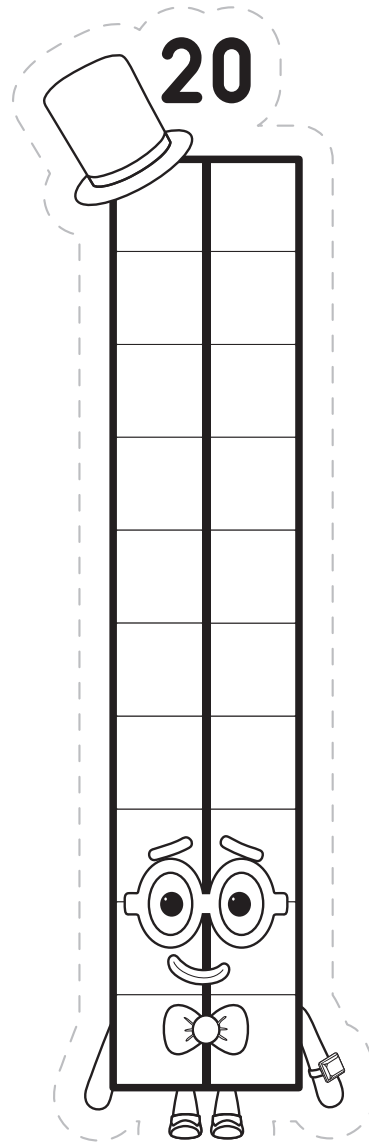


## Add the blocks

3

Cut out the Numberblocks on your extra sheet and  
add them to Numberblock Twenty to create new  
friends. Can you make Numberblocks Twenty-One,  
Twenty-Two and Twenty-Three?



# Twenty and Some More



**Add 1 more**

**Take away 2**

**Add 2 more**

**Take away 1**

**Add 3 more**

**Take away 3**