

Number Explorer Missions



With a grown-up, write the numbers 1-20 on a piece of paper. Cut out each number to make a number card. Can you find the twenty friends and put them together?



Build the twenty friends with toy bricks. Can you make them the same colours as the Numberblocks?



Ask your grown-up to say a number from 1-20, can you say a twenty friend? Then swap so you say the number!




Play Together

Place the cut-out Numberblocks from your extra sheet on a table and muddle them all up! With a friend or grown-up, find the twenty friends, whoever finds the most pairs is the winner!

For your next mission, find the episode 'Ten Vaulting'

Twenty's friends

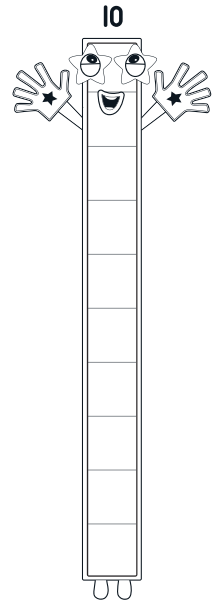
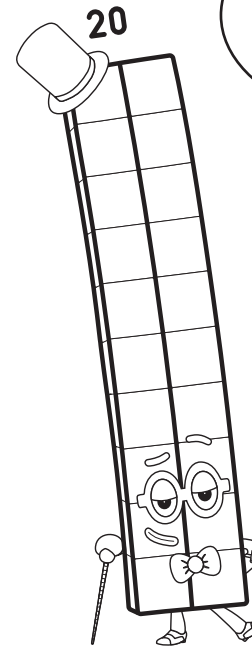
This fun mission belongs to _____



Help find the friends that add up to twenty!

I know who can help!

You know your ten friends, Ten. I wish I knew my twenty friends!



Step this way! →



Level 3



Number Bonds

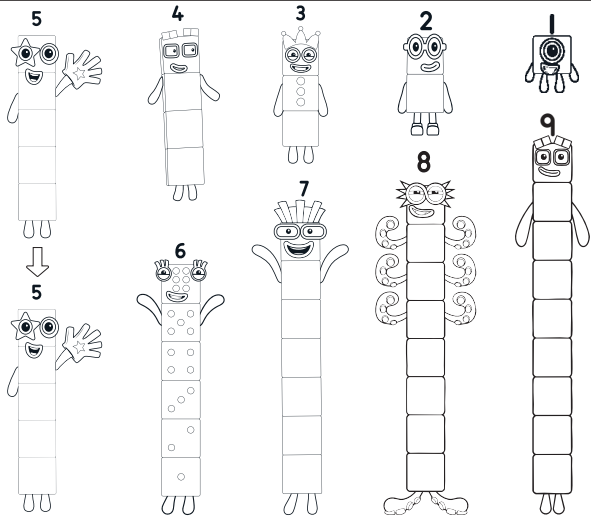


The Many Friends of Twenty

Find the friends

Ten's friends can help!
Write what they add up to!

2



$5 + 5 = \square$

$6 + 4 = \square$

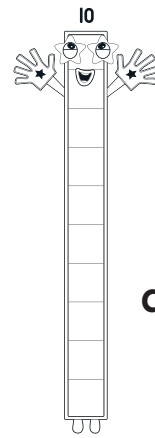
$7 + 4 = \square$

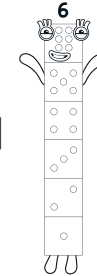
$8 + 2 = \square$

$9 + 1 = \square$

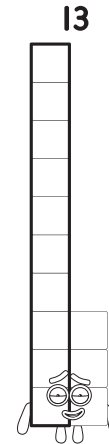
Who are the Twenty friends? Tick the correct answer.

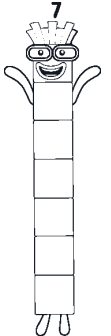
3





or



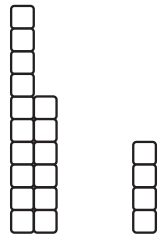
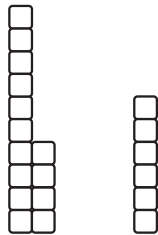


Now you're ready to find Twenty's friends!

I'm ten more than Ten, so I can make...

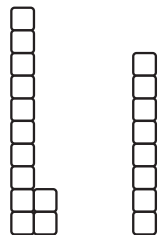
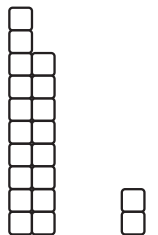
$14 + \square$

$or \quad 16 + \square$



$18 + \square$

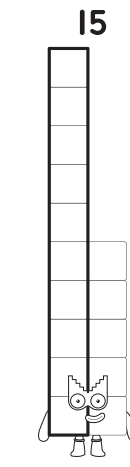
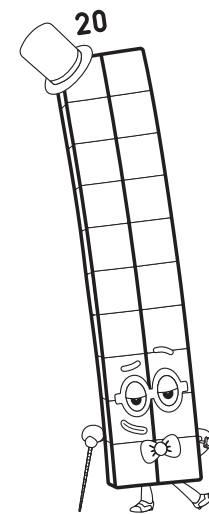
$or \quad 12 + \square$



Ten can be five and five, so I can be...


$\square + \square = \square$

Can you write the answers to find these Twenty friends?



Well done!
Colour in a High Five!

5



Twenty's Friends

Snip out the Twenty friends and find out how to play a game on page 4 of your booklet.

