

Number Explorer Missions



Use the Numberblock Fours you have cut out to try counting in fours. Can you get all the way to Forty? Can you count backwards from Forty to Four?



Look for 4 legs on an animal or legs on a chair. Can you find ten groups? How many is that?



Try making a square with 4 pieces of pasta. Can you make 10 squares using 40 pieces of pasta?



Do 10 star jumps as you say your 4 times table. One 4 is 4, two 4's are 8, and so on. Can you get all the way to ten 4's are 40?



Play Together

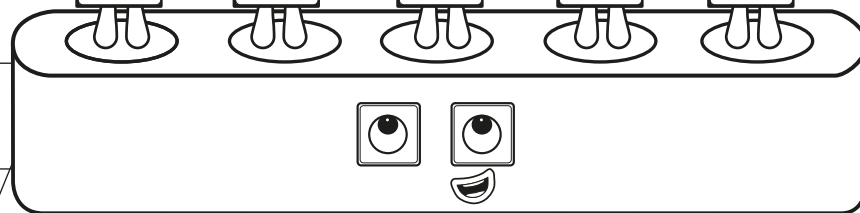

Fun Times Tables. Find the extra sheet with the Times Tables on it. Can you put the right number of Fours on each Times Table. How many blocks are there each time?

For your next mission, find the episode 'Sky High Fives'

Four on the Floor

This mission belongs to _____

Which Numberblock is the same as Five Fours?
Count the blocks if you get stuck.



Level 5

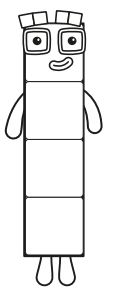


Four Times Table



Four on the Floor


4




Magic Mirrors

How many Fours have you got each time?
How many blocks altogether?


Take it in turns to place the Fours in each Magic Mirror. Can you say the number sentences as the Fours are placed?




$1 \times 4 = 4$




$2 \times 4 = \underline{\quad}$




$3 \times 4 = \underline{\quad}$



$4 \times 4 = \underline{\quad}$




$5 \times 4 = \underline{\quad}$



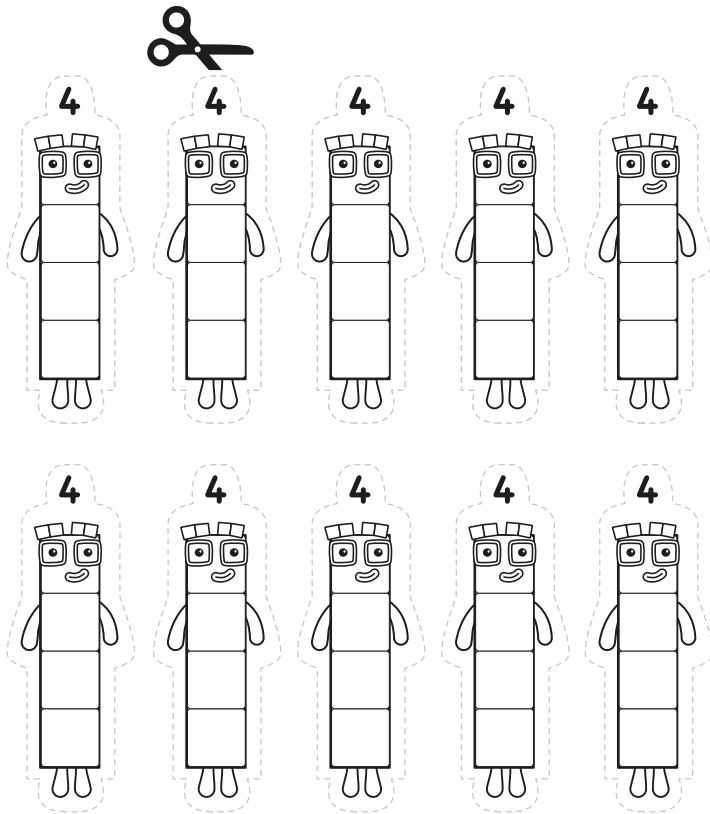
$6 \times 4 = 24$

How many Fours?

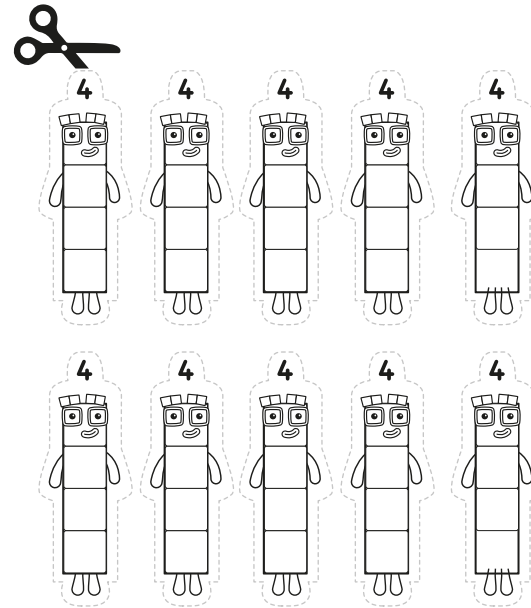
How many Numberblock Fours can you draw in this square? Do they all look the same?



Forever Fours



Play Together



Use your Fours to fill the gaps!