


Mehr oder weniger?

Aufgabe 1 Wer kauft was? Verbinde die Geldbeutel mit den Gegenständen. Achtung: ein Gegenstand bleibt übrig.



15,75 €



0,79 €



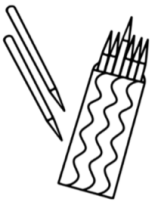
0,99 €



12,50 €

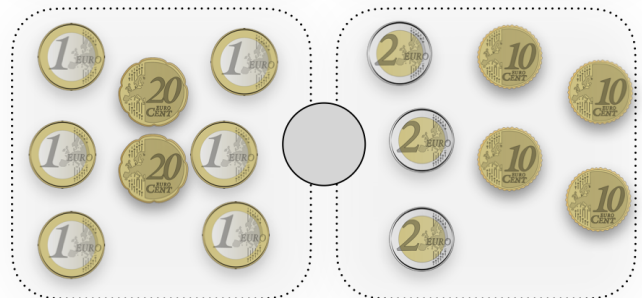





16,50 €



10,09 €

Aufgabe 2 Mehr, weniger oder gleich viel?
Setze das richtige Zeichen ein: >, < oder = !



Mehr oder weniger? - Lösungsblatt

Lösung 1

The diagram shows five purses at the top, each containing different Euro banknotes and coins. Colored lines connect these purses to school supplies below:

- Purse 1 (Blue line):** Connected to a notebook (15,75 €).
- Purse 2 (Green line):** Connected to an eraser (0,79 €).
- Purse 3 (Purple line):** Connected to a ruler (0,99 €).
- Purse 4 (Orange line):** Connected to a fountain pen (12,50 €).
- Purse 5 (Pink line):** Connected to a pencil case (16,50 €).

Below the supplies are their prices in Euro:

- Notebook: 15,75 €
- Eraser: 0,79 €
- Ruler: 0,99 €
- Fountain pen: 12,50 €
- Pencil case: 16,50 €
- Pencils: 10,09 €

Lösung 2

The diagram shows four pairs of Euro banknotes and coins, each with a comparison symbol in the center:

- Pair 1:** Left side has one 50-cent coin, one 20-cent coin, and one 10-cent coin. Right side has one 1-euro coin and one 10-cent coin. Symbol: $<$
- Pair 2:** Left side has one 20-euro banknote, one 5-euro banknote, and one 1-euro coin. Right side has one 10-euro banknote, one 2-euro coin, and one 10-cent coin. Symbol: $=$
- Pair 3:** Left side has one 50-euro banknote, one 5-cent coin, and one 2-cent coin. Right side has one 20-euro banknote, one 10-euro banknote, one 5-cent coin, and one 2-cent coin. Symbol: $>$
- Pair 4:** Left side has three 1-euro coins and three 20-cent coins. Right side has three 2-euro coins and three 10-cent coins. Symbol: $=$