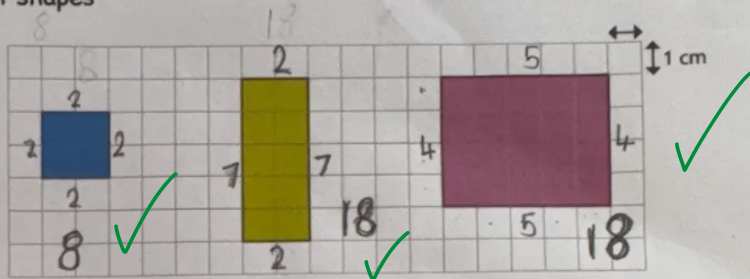




## LO - I can work out a perimeter of a shape using a grid

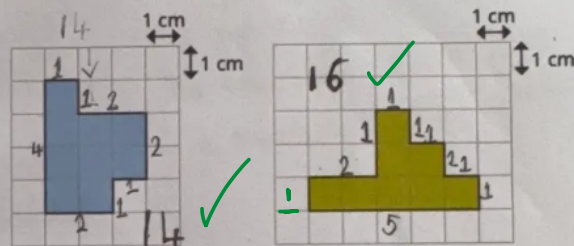
Following on from the video lesson, you are going to be working out the perimeters of different shapes

**TASK 1:** Work out the perimeters of these shapes:



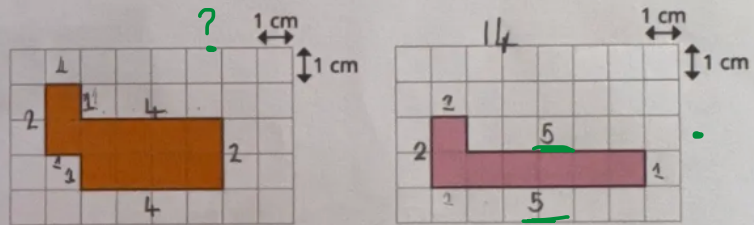
**TASK 2:** Work out the perimeters of these shapes:

How did you find the perimeters?



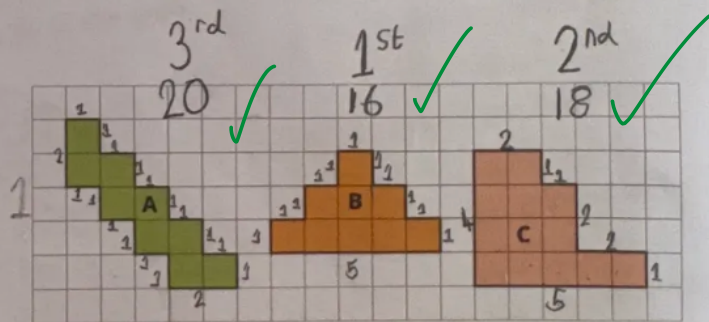
**TASK 3:** Look at these two rectilinear shapes, are the perimeters of the shapes the same or different?

How do you know?



**TASK 4:** Find the perimeter of each of these shapes:

Order the shapes from smallest to greatest perimeter



Well done, Lara. Good work on the perimeter using a grid.

T- Have another look at Task 3.