

# Class 5 Ratio Worksheet by Thinking Juggernaut

Name: \_\_\_\_\_

Date: \_\_\_\_\_

Total Marks: 24

## What is Ratio?

A ratio compares two or more quantities of the same kind.

For example: If there are 3 apples and 5 oranges, the ratio of apples to oranges is **3:5** (read as "3 is to 5")

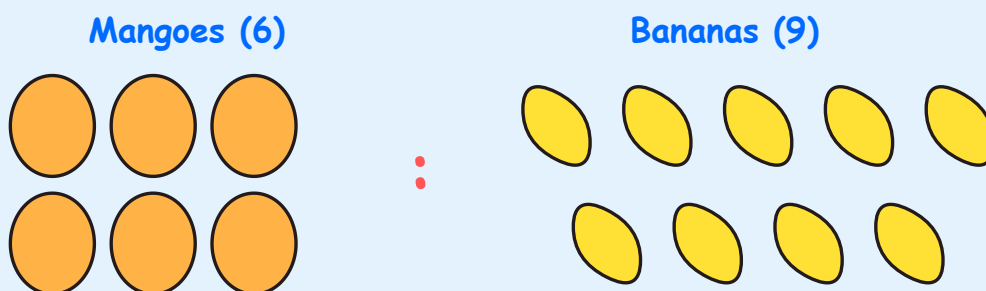
- **Order matters:** Ratio 3:5 is different from 5:3
- **Same units:** We can only compare quantities with the same units (apples to apples, not apples to oranges' weight!)
- **Simplest form:** Like fractions, ratios can be simplified ( $4:8 = 1:2$ )
- **Three ways to write:** 3:5 or 3 to 5 or  $\frac{3}{5}$

### Real-life Examples:

- Classroom: 15 boys to 18 girls (ratio  $15:18 = 5:6$ )
- Colors: Mixing 1 part blue to 2 parts yellow makes green (ratio 1:2)

## Sample Problem

**Problem:** In Rahul's fruit basket, there are 6 mangoes and 9 bananas. Find the ratio of mangoes to bananas and simplify it.



Ratio = 6:9

**Solution:**

Number of mangoes = 6

Number of bananas = 9

Ratio of mangoes to bananas = 6:9

**Simplifying:**

Both 6 and 9 are divisible by 3

$$6 \div 3 = 2$$

$$9 \div 3 = 3$$

**Answer:** The ratio in simplest form is 2:3 🍌🍌

## Part A: Warm-up Questions

★ Easy Level

1. Write the ratio of stars to hearts.



Answer: \_\_\_\_\_

2. Fill in the blank: The ratio 5:3 is read as "\_\_\_\_\_ to \_\_\_\_\_".

3. True or False: The ratio 2:5 is the same as 5:2.

☐ True   ☐ False

4. In a box, there are 7 red balls and 8 blue balls. What is the ratio of red balls to blue balls?

Answer: \_\_\_\_\_

5. Simplify the ratio:  $10:15 =$  \_\_\_\_\_

6. A packet has 3 pencils and 6 pens. Write the ratio of pencils to pens.

Answer: \_\_\_\_\_

7. Which ratio is larger? Circle the correct answer.

3:2    OR    2:3

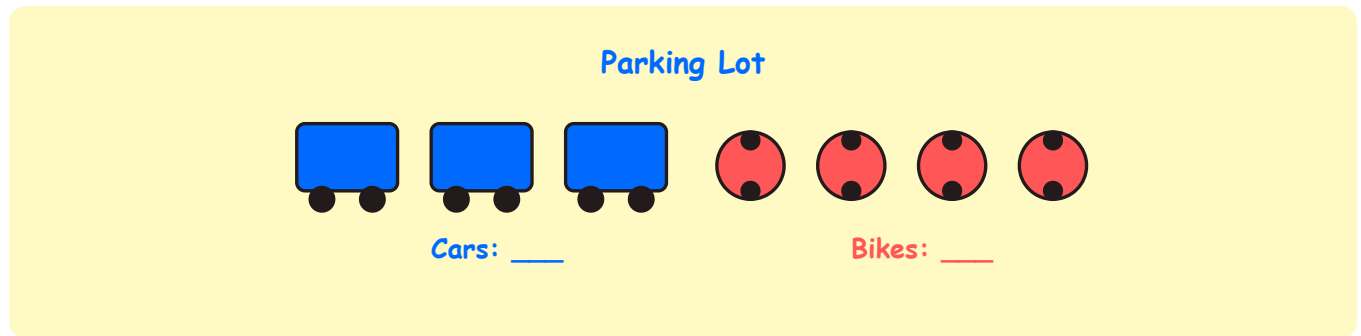
(Hint: Compare the first number to the second number)

8. Complete: If the ratio of chapatis to rotis is  $4:3$ , then for every 4 chapatis there are \_\_\_\_\_ rotis.

## Part B: Practice Questions

☆☆ Medium Level

9. Look at the parking lot. What is the ratio of cars to bikes?



Ratio: \_\_\_\_

10. A cricket team has 11 players. 6 are batsmen and 5 are bowlers. Find the ratio of batsmen to bowlers.

11. Match Column A with Column B:

Column A	Column B
a) 6:8 simplified	i) 1:2
b) 4:8 simplified	ii) 3:4
c) 9:12 simplified	iii) 2:3
d) 8:12 simplified	iv) 3:5

Write your answers: a-\_\_\_\_, b-\_\_\_\_, c-\_\_\_\_, d-\_\_\_\_

12. In Priya's garden, there are 15 rose plants and 20 tulip plants. What is the ratio of roses to tulips in simplest form?

13. A recipe uses milk and water in the ratio 3:2. If you use 6 cups of milk, how many cups of water do you need?

14. Look at the ribbon pattern. What is the ratio of green squares to yellow squares?



Ratio: \_\_\_\_\_

15. True or False: The ratio 4:5 means there are 4 parts out of 9 total parts.

☐ True   ☐ False

16. In a school library, there are 48 Hindi books and 36 English books. Find the ratio of Hindi books to English books in simplest form.

17. Arrange these ratios in ascending order: 2:3, 1:3, 2:5

\_\_\_\_\_ < \_\_\_\_\_ < \_\_\_\_\_

(Hint: Convert to fractions or find common denominators)

18. A bag contains red and blue marbles in the ratio 5:7. If there are 25 red marbles, how many blue marbles are there?

## Part C: Challenge Questions

☆☆☆ Hard Level

19. A sweet shop sells samosas and kachoris in the ratio 4:3. If they sold 28 samosas in one hour, how many kachoris did they sell?



1 part = \_\_\_\_\_

Kachoris sold = \_\_\_\_\_

**20.** The ratio of Amit's age to his sister's age is 3:2. If Amit is 15 years old, how old is his sister?

**21.** A fruit seller has apples and oranges in the ratio 5:4. If he has a total of 72 fruits, how many apples and how many oranges does he have?

Total parts = \_\_\_\_\_

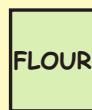
Value of 1 part = \_\_\_\_\_

Apples = \_\_\_\_\_

Oranges = \_\_\_\_\_

**22.** A recipe for making ladoos requires flour and sugar in the ratio 7:3. If you use 21 cups of flour, how much sugar do you need? Also find the total quantity of mixture.

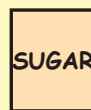
**Recipe - Ratio 7:3**



7 parts

=

**21 cups**



3 parts

=

**? cup**

Sugar needed = \_\_\_\_\_

Total mixture = \_\_\_\_\_

**23.** In a class test, the ratio of students who passed to those who failed is 8:2. If 40 students took the test, how many passed and how many failed?

Students passed = \_\_\_\_\_

Students failed = \_\_\_\_\_

**24.** A gardener plants roses and jasmine in the ratio 3:5. If he plants 15 roses, how many jasmine plants does he plant? What is the total number of plants?

Jasmine plants = \_\_\_\_\_

Total plants = \_\_\_\_\_



## Answer Key

### Part A: Warm-up Questions

1. 4:2 or 2:1 (4 stars to 2 hearts, simplified is 2:1)

2. Five to Three

3. False (Order matters in ratios!  $2:5 \neq 5:2$ )

4. 7:8

5. 2:3 (divide both by 5)

6. 3:6 or 1:2 (simplified)

7. 3:2 is larger ( $3/2 = 1.5$ , while  $2/3 = 0.67$ )



8. 3 rotis

### Part B: Practice Questions

9. 3:4 (3 cars to 4 bikes)

10. 6:5

11. a-ii (3:4), b-i (1:2), c-ii (3:4), d-iii (2:3)

12. 3:4 ( $15:20 = 3:4$ , divide both by 5)

13. 4 cups (If ratio is 3:2 and milk is 6, then  $6 \div 3 = 2$ , so water =  $2 \times 2 = 4$ )

14. 5:5 or 1:1 (5 green, 5 yellow)

15. True ( $4+5 = 9$  total parts)

16. 4:3 ( $48:36 = 4:3$ , divide both by 12)

17.  $1:3 < 2:5 < 2:3$  (Converting:  $1/3 = 0.33$ ,  $2/5 = 0.4$ ,  $2/3 = 0.67$ )

18. 35 blue marbles (5:7 means if red = 25, then 1 part = 5, so blue =  $7 \times 5 = 35$ )

### Part C: Challenge Questions

19. 1 part = 7 ( $28 \div 4$ ), Kachoris = 21 ( $7 \times 3$ )

20. 10 years old (3:2 ratio, Amit is 15, so 1 part = 5, sister =  $2 \times 5 = 10$ )

21. Total parts = 9, Value of 1 part = 8 ( $72 \div 9$ ), Apples = 40 ( $5 \times 8$ ), Oranges = 32 ( $4 \times 8$ )

22. Sugar needed = 9 cups (7:3, flour 21, so 1 part = 3, sugar =  $3 \times 3 = 9$ ), Total = 30 cups

23. Passed = 32 ( $8:2 = 4:1$  simplified, total parts = 5, 1 part = 8, passed =  $4 \times 8$ ), Failed = 8 ( $1 \times 8$ )

24. Jasmine = 25 (3:5, roses 15, so 1 part = 5, jasmine =  $5 \times 5 = 25$ ), Total = 40

## Scoring Guide

Total Questions: 24 | Total Marks: 24

Score Range	Performance Level	What to Do Next
20-24	☆☆☆ Excellent!	You're a ratio master! Try solving problems with three-term ratios (like 2:3:5).
15-19	☆☆ Very Good!	Great work! Practice more word problems that require finding unknown quantities.
10-14	☆ Good Effort!	Keep practicing! Focus on simplifying ratios and understanding the relationship between parts.
0-9	Keep Trying!	Review the concept section. Practice finding ratios from pictures and simplifying them daily.

### Tips for Improvement:

- **Always simplify:** Divide both parts by their HCF (like 10:15 becomes 2:3)
- **Order matters:** Remember 3:5 is different from 5:3
- **Find the value of 1 part:** In word problems, divide the given quantity by its ratio part
- **Check total parts:** When given total, add ratio parts (3:5 means 8 total parts)
- **Use multiplication:** Once you know 1 part, multiply to find other quantities
- **Practice with real objects:** Use marbles, candies, or toys to visualize ratios

### Common Mistakes to Avoid:

- ❌ Forgetting to simplify the final answer
- ❌ Mixing up the order (writing 5:3 instead of 3:5)
- ❌ Not finding the value of 1 part in word problems
- ❌ Adding ratios incorrectly ( $2:3 + 1:2 \neq 3:5$ )

Keep practicing ratios and you'll master them in no time!

🔥 Download more worksheets like this

🌐 Visit: <https://thinkingjuggernaut.in/>



## NEP-aligned, hands-on experiential kits

NEP-2020 aligned hands-on kits and workbooks that help kids think independently, solve problems, and explore experiential learning.

Explore Kits

Founded by NIT & IIT Alumni

# THINKING JUGGERNAUT



## NEP-aligned, hands-on experiential kits



Applied Maths Kit (Age 7+)



Applied Maths Kit (Age 10+)



Interdisciplinary STEM Kit  
(Age 7+)



Interdisciplinary STEM Kit  
(Age 10+)



Entrepreneurship Kit



Finance Literacy Kit



Chess Starter Kit



Explore Sanskrit Kit

Founded by IIT & NIT Alumni, Thinking Juggernaut is a NEP-2020 aligned experiential learning platform that builds 21st-century skills, connects subjects, and links classroom concepts to real-life challenges.

[View All Kits Online →](#)